



2


1

4

3

5





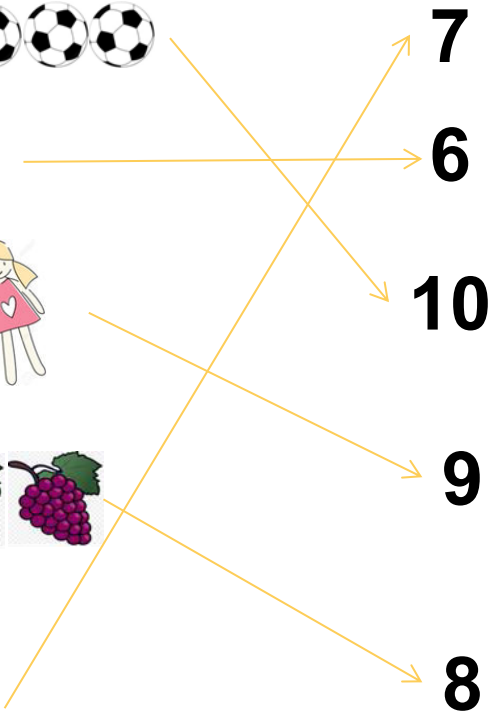
7

6

10

9

8








**1**


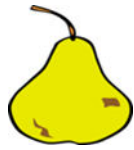
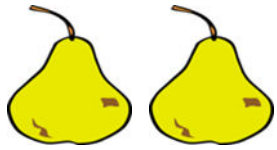
**+**

**1**

**=**

**2**






$$2 + 1 = 3$$





$$1 + 1 = 2$$






$$2 + 1 = 3$$






+



=



2

+


2

=

4








**3**

**+**

**2**

**=**

**5**





4

+

1

=

5




$$3 + 2 = 5$$


$$4 + 1 = 5$$




-



=




**2**


-

**1**


=

**1**






-



=



**3**

-


**1**

=

**2**



$$2 - 1 = 1$$





**3**

**-**

**1**

**=**


**2**







-



=



**3**


-

**2**

=

**1**





-



=



4

-

2

=

2



5

-

1

=

4



**3**

**-**

**2**

**=**

**1**






4

-


2

=

2




$$5 - 1 = 4$$





გადახაზეთ ზედმეტი რაოდენობა:

Three crescent moon icons. A horizontal line is drawn through the last two moons. The number 3 is written to the right.

Six square icons with rounded corners. A horizontal line is drawn through the last two squares. The number 4 is written to the right.

Five cloud-like icons. A horizontal line is drawn through the last three clouds. The number 2 is written to the right.

Six heart icons. A horizontal line is drawn through the last heart. The number 5 is written to the right.

